

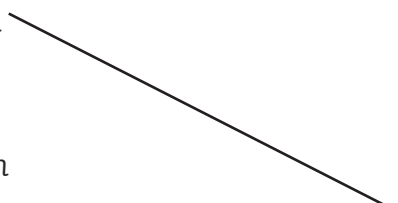
# Converting Between Different Units of Measurement

1. Complete this table. The first one has been done for you.

Millilitres (ml)	Litres (l)
650	0.65
2300	
	4.37
	9.2
780	

2. Draw lines to match these measurements. One has been done for you.

170cm	800cm
40cm	2.5m
8m	1700cm
250cm	0.4m
4m	1.7m
17m	400cm



3. Use  $<$ ,  $=$  or  $>$  to complete the following sentences:

8400g  8.4kg

1100g  1kg

725g  7.25kg

6.6kg  660g

3.7kg  379g

2890g  2.89kg

4. Complete the number sentences below:

250g =      kg

390cm =      m

2.6l =      ml

0.46kg =      g

5.6m =      cm

350ml =      l

1240g =      kg

980cm =      m

0.8l =      ml

# Converting Between Different Units of Measurement

1. Complete this table. The first one has been done for you.

Millilitres (ml)	Centilitres (cl)	Litres (l)
350	35	0.35
1300		
		2.6
	82	
680		

Draw lines to match these measurements. One has been done for you.

170cm	0.86m
40mm	2.5m
860mm	1.7cm
250cm	0.4cm
8.6m	1.7m
17mm	860cm
4mm	0.04m

2. Use <, = or > to complete the following sentences:

6g	<input type="text"/>	0.006kg	0.46kg	<input type="text"/>	46g	3.5g	<input type="text"/>	3550kg
1001g	<input type="text"/>	1kg	0.38kg	<input type="text"/>	379g	4560g	<input type="text"/>	4.56kg

3. Complete the number sentences below:

360g =	kg	830cm =	m	4.2l =	ml	3400m =	km
0.74kg =	g	2.6m =	cm	760ml =	l	0.23km =	m
3078g =	kg	180cm =	m	0.9l =	ml	46m =	km

# Converting Between Different Units of Measurement

1. Complete this table. The first one has been done for you.

Millilitres (ml)	Centilitres (cl)	Litres (l)
860	86	0.86
9700		
		$\frac{1}{2}$ litre
820		
		$\frac{3}{4}$ litres

Draw lines to match these measurements. One has been done for you.

9cm	0.86km
99mm	6.5m
860m	6.5cm
650cm	9900m
0.86m	0.09m
65mm	86cm
9.9km	9.9cm

2. Use <, = or > to complete the following sentences:

$\frac{1}{4}$ kg	<input type="text"/>	250g	8005g	<input type="text"/>	8.5kg	0.09kg	<input type="text"/>	6g
12.5kg	<input type="text"/>	1250g	10 001g	<input type="text"/>	10kg	750g	<input type="text"/>	$\frac{3}{4}$ kg

3. Complete the number sentences below:

360g =	kg	830cm =	m	4.2l =	ml	3400m =	km
0.74kg =	g	2.6m =	cm	760ml =	l	0.23km =	m
3078g =	kg	180cm =	m	0.9l =	ml	46m =	km

4. Sam says: 9.05kg is equal to 9500g. Is he right or wrong? Explain your answer.

---



---



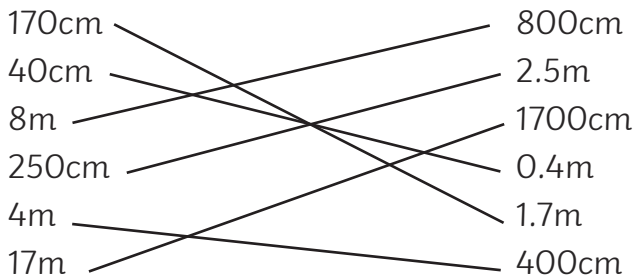
---

# Converting Between Different Units of Measurement: **Answers**

1. Complete this table. The first one has been done for you.

Millilitres (ml)	Litres (l)
650	0.65
2300	2.3
4370	4.37
9200	9.2
780	0.78

2. Draw lines to match these measurements. One has been done for you.



3. Use  $<$ ,  $=$  or  $>$  to complete the following sentences:

$8400\text{g} \boxed{=} 8.4\text{kg}$

$1100\text{g} \boxed{>} 1\text{kg}$

$725\text{g} \boxed{<} 7.25\text{kg}$

$6.6\text{kg} \boxed{>} 660\text{g}$

$3.7\text{kg} \boxed{>} 379\text{g}$

$2890\text{g} \boxed{=} 2.89\text{kg}$

4. Complete the number sentences below:

$250\text{g} = 0.25\text{kg}$

$390\text{cm} = 3.9\text{m}$

$2.6\text{l} = 2600\text{ml}$

$0.46\text{kg} = 460\text{g}$

$5.6\text{m} = 560\text{cm}$

$350\text{ml} = 0.35\text{l}$

$1240\text{g} = 1.24\text{kg}$

$980\text{cm} = 9.8\text{m}$

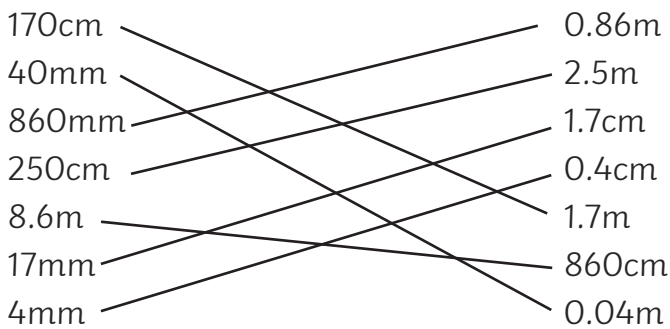
$0.8\text{l} = 800\text{ml}$

# Converting Between Different Units of Measurement: **Answers**

1. Complete this table. The first one has been done for you.

Millilitres (ml)	Centilitres (cl)	Litres (l)
350	35	0.35
1300	130	1.3
2600	260	2.6
820	82	0.82
680	68	0.68

Draw lines to match these measurements. One has been done for you.



2. Use <, = or > to complete the following sentences:

6g        0.006kg    0.46kg        46g    3.5g        3550kg  
 1001g        1kg    0.38kg        379g    4560g        4.56kg

3. Complete the number sentences below:

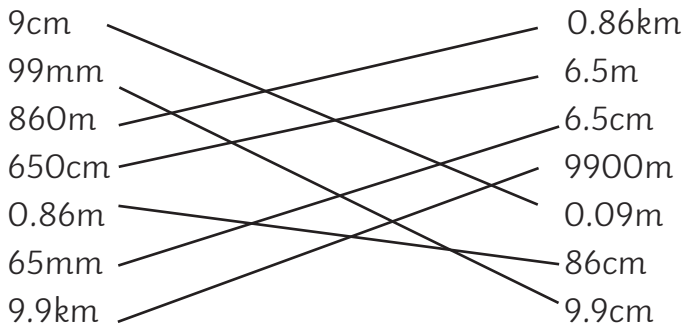
360g = 0.36kg    830cm = 8.3m    4.2l = 4200ml    3400m = 3.4km  
 0.74kg = 740g    2.6m = 260cm    760ml = 0.76l    0.23km = 230m  
 3078g = 3.078kg    180cm = 1.8m    0.9l = 900ml    46m = 0.046km

# Converting Between Different Units of Measurement: **Answers**

1. Complete this table. The first one has been done for you.

Millilitres (ml)	Centilitres (cl)	Litres (l)
860	86	0.86
9700	970	9.7
500	50	$\frac{1}{2}$ litre
820	82	0.82
750	75	$\frac{3}{4}$ litres

Draw lines to match these measurements. One has been done for you.



2. Use  $<$ ,  $=$  or  $>$  to complete the following sentences:

$\frac{1}{4}$  kg  250 g      8005g  8.5kg      0.09kg  6g  
 12.5kg  1250 g      10 001g  10kg      750g   $\frac{3}{4}$  kg

3. Complete the number sentences below:

360g = 0.36kg      830cm = 8.3m      4.2l = 4200ml      3400m = 3.4km  
 0.74kg = 740g      2.6m = 260cm      760ml = 0.76l      0.23km = 230m  
 3078g = 3.078kg      180cm = 1.8m      0.9l = 900ml      46m = 0.046km

4. Sam says: 9.05kg is equal to 9500g. Is he right or wrong? Explain your answer.

**Sam is wrong because 9.05kg is equal to 9050g, not 9500g. The digit 5 is worth 5 tens, not 5 hundreds.**